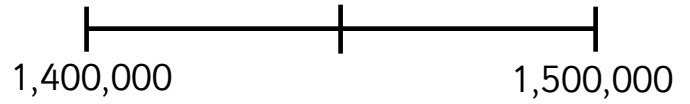
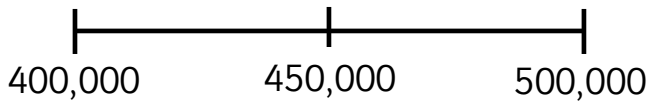


Guided Learning Task 1 (Round the number in the box to the nearest 100,000; mark it on the line and circle the number it rounds to.)

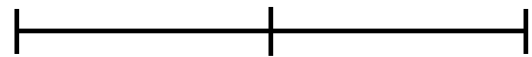
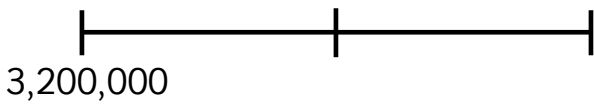
a) 467,098

b) 1,467,098



c) 3,246,899

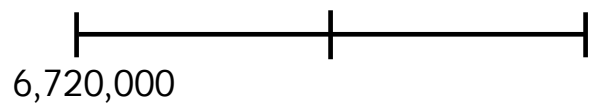
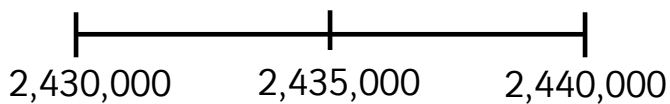
d) 4,851,432



Guided Learning Task 2 (Round the number in the box to the nearest 10,000; mark it on the line and circle the number it rounds to.)

e) 2,431,665

f) 6,728,007



g) 2,431,665 rounded to the nearest 1,000 is _____

h) 6,728,007 rounded to the nearest 1,000 is _____

i) 2,431,665 rounded to the nearest 10 is _____

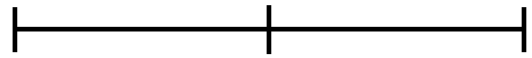
j) 6,728,007 rounded to the nearest 10 is _____

Independent Learning Tasks

k) Round 7,784,228 to the nearest 100,000



l) Round 4,187,400 to the nearest 10,000



m)

5,346,779 $\xrightarrow[\text{nearest } 100,000]{\text{Rounded to the}}$

n)

5,346,779 $\xrightarrow[\text{nearest } 10,000]{\text{Rounded to the}}$

o) Round 3,576,219 to the **nearest million**

p) The table shows the total attendance figures for 3 baseball stadiums.

Round each number to the nearest ten thousand

Stadium	Total attendance	Total attendance, rounded to nearest ten thousand
Dodger Stadium	3,703,312	
Angel Stadium	3,016,142	
Fenway Park	2,955,434	

q) A newspaper reported,

'6 million people (to the nearest million) watched a football match on television.'

What is the smallest number of people that could have watched the football match on television?

r) Write the number that is nearest to **2,000,000** which uses all the digits **1, 2, 3, 4, 5, 6 and 7**

--	--	--	--	--	--	--